

Math Choice Board

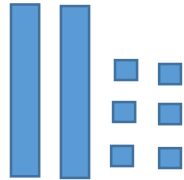
Name _____

Place Value

Create Number Posters

Write Number Riddles

twenty-six



2 tens 6 ones

$$20 + 6$$

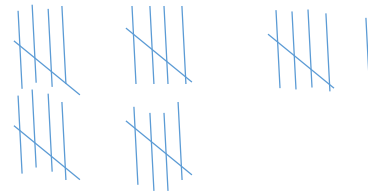
$$25 + 1$$

$$36 - 10$$

$$16 + 10$$

26

$$27 - 1$$



OR

I am less than 12.

I am not 11.

I am $3+3+3$.

What am I?



I am more than 5.

I am an even number.

I am the number of fingers on 2 hands.

What am I?



I am an odd number.

I am between 7 and 13.

I am 1 dime and 1 penny.

What am I?



I am an even number.

I am a 2-digit number.

I am $6+6$.

What am I?



Seatwork Choice Board


Name _____

Addition/Subtraction

Write a story problem, solve it, and draw a picture.

Secret Code Math Facts
(See Below)

Ben saw three bugs under the rock. Five bugs are by the tree. How many bugs all together?



$$3 + 5 = 8$$

OR

Create your own secret code for the numbers. Then, create math problems using the code. Be sure to solve it by writing the answers in standard form.

1	2	3	4	5	6	7	8	9	10